



UNIVERSITY OF CAMBRIDGE INTERNATIONAL EXAMINATIONS
General Certificate of Education Ordinary Level

CANDIDATE
NAME

CENTRE
NUMBER

| | | | | |
|--|--|--|--|--|
| | | | | |
|--|--|--|--|--|

CANDIDATE
NUMBER

| | | | |
|--|--|--|--|
| | | | |
|--|--|--|--|



BANGLADESH STUDIES

7094/02

Paper 2 Environment and Development of Bangladesh

May/June 2012

1 hour 30 minutes

No Additional Materials are required.

READ THESE INSTRUCTIONS FIRST

Write your Centre number, candidate number and name in the boxes above.
Write in dark blue or black pen.
You may use a pencil for any sketch maps, diagrams, graphs or rough working.
Do not use staples, paper clips, highlighters, glue or correction fluid.
DO NOT WRITE IN ANY BARCODES.

Answer **three** questions.
You are advised to spend about 30 minutes on each question.
The number of marks is given in brackets [] at the end of each question or part question.

| For Examiner's Use | |
|--------------------|--|
| 1 | |
| 2 | |
| 3 | |
| 4 | |
| 5 | |

This document consists of **23** printed pages and **1** blank page.



(d) Study the two statements below.

A 'Rivers are the life-blood of Bangladesh.'

B 'Rivers are Bangladesh's sorrow.'

(i) Give **one** piece of evidence which supports statement A.

.....
..... [1]

(ii) Give **one** piece of evidence which supports statement B.

.....
..... [1]

(iii) Which statement do you agree with the most? Give reasons for your answer.

.....
.....
.....
.....
.....
.....
.....
.....
.....
..... [3]

[Total: 25]

- 2 (a) Study Fig. 3, which shows a variety of predictions about how much the sea level may rise in the future. Each line on the graph represents a different prediction.

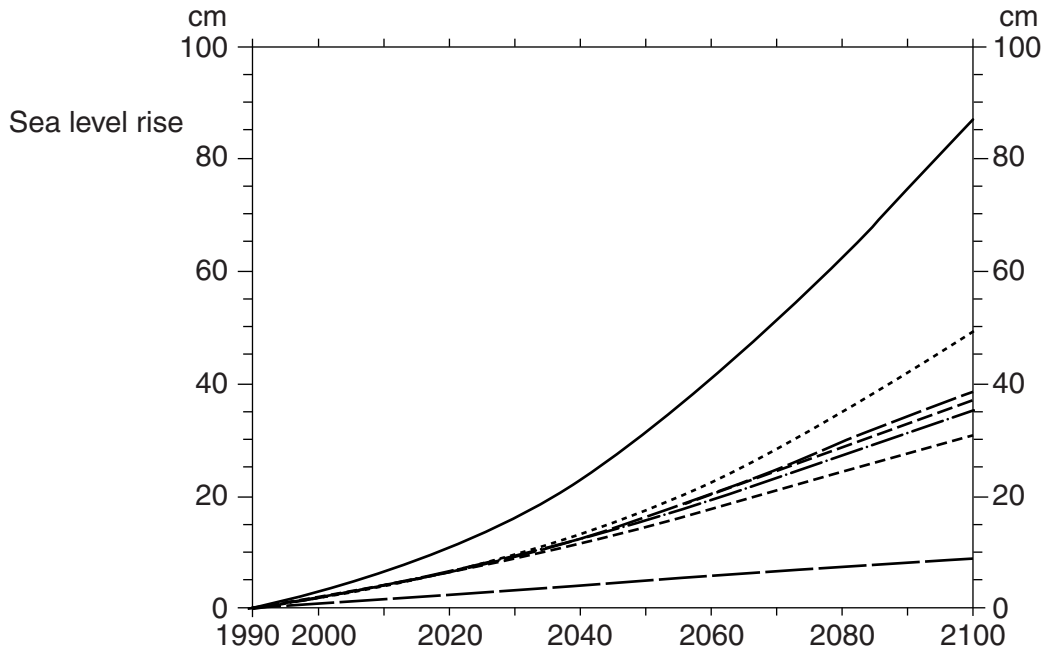


Fig. 3

- (i) What is the highest prediction for the rise in sea level between 1990 and 2030?
..... [1]
- (ii) What is the lowest prediction for the rise in sea level between 1990 and 2030?
..... [1]
- (iii) Describe what the graph (Fig. 3) shows about predicted sea level rises to 2100.
.....
.....
.....
..... [2]
- (iv) Sea level is predicted to rise further due to global warming. In what way does global warming affect sea level?
.....
.....
.....
..... [2]

(iii) Explain **two** effects of global warming on Bangladesh other than rising sea level.

1

.....

.....

.....

.....

2

.....

.....

.....

..... [4]

(c) Read the account below about the village of Sona Mollar Dangi. It is based on a case study in a government report on the impact of global warming on Bangladesh.

Village elder Sona Molla moved his community onto a newly-formed island in the Padma river in order to find a place where it could settle down and make a living. It survived one major flood in 1998 but then others followed in 2004 and 2007. Sona Molla realised that his community had to take action in order to survive. With the help of the Faridpur Development Agency, it raised all buildings by half a metre above the level of the 1998 flood. The gardens and fruit trees are also now on raised ground. Next, the community plans to raise the level of the tube wells. Everyone now feels more secure about the future. They are talking about having a primary school and a health clinic. One household has put a solar panel on a tin roof.

Explain how these changes will help this community to cope with global warming.

.....

.....

.....

.....

.....

.....

.....

..... [3]

3 (a) Study Fig. 4, which shows the main areas of wheat and rice production.

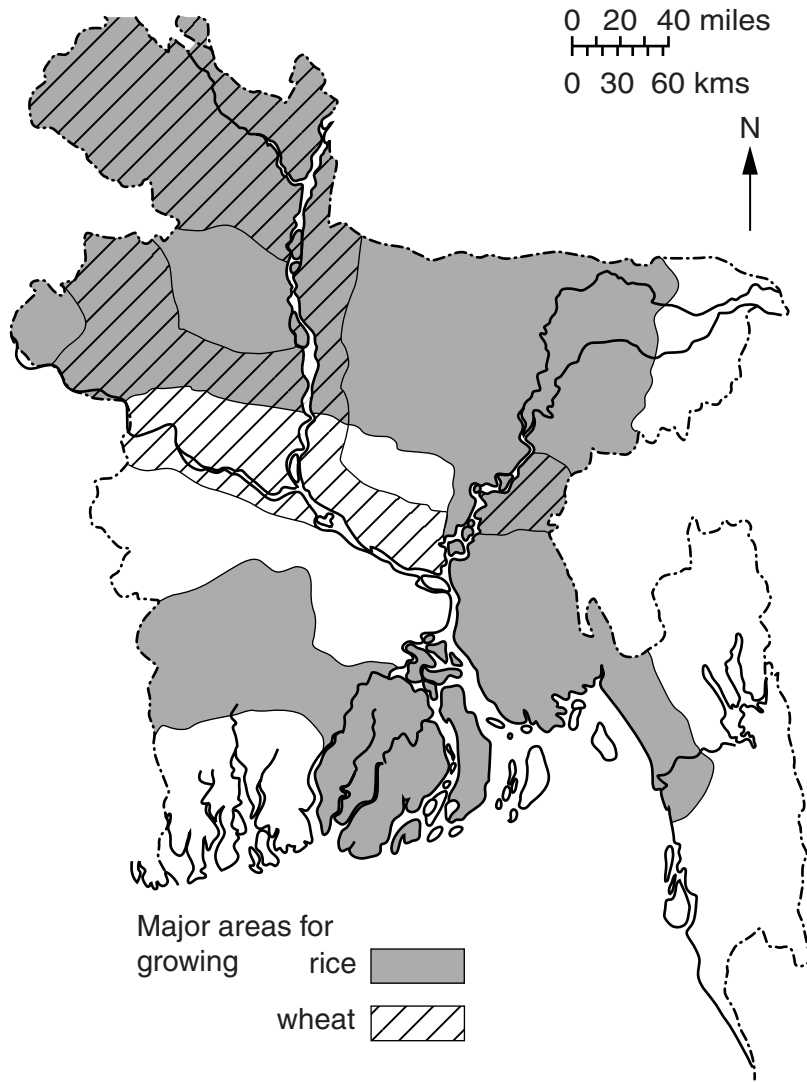


Fig. 4

(i) Describe the location of the major wheat growing areas.

.....
.....
.....
..... [2]

(ii) Give reasons why wheat is a major crop in these areas.

.....
.....
.....
..... [2]

(b) Study Fig. 5, which shows changes in cereal production between 1980 and 2000.

For
Examiner's
Use

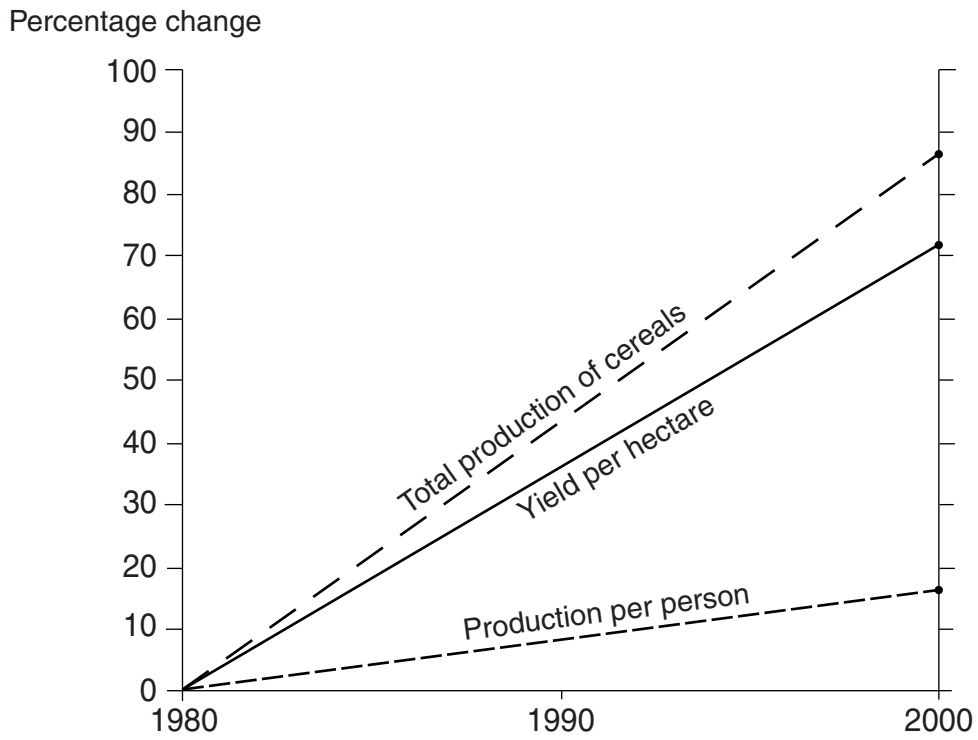


Fig. 5

(i) Compare the change in total production of cereals with the change in the production per person.

.....
.....
.....
..... [2]

(ii) Suggest a reason for the differences you described in (b)(i).

.....
.....
.....
..... [2]

4 (a) Study Fig. 7, which shows population density.

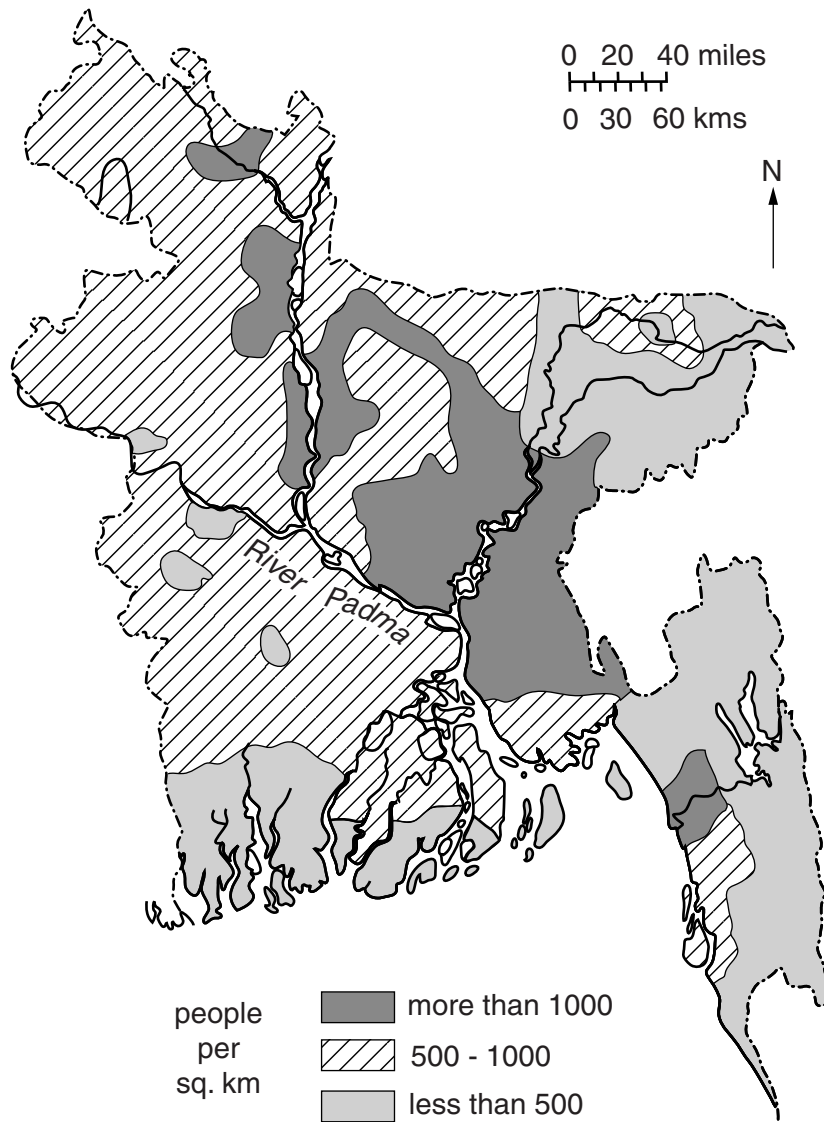


Fig. 7

Describe how population density changes along the River Padma from the Bay of Bengal to the border with India.

.....

.....

.....

.....

.....

.....

.....

.....

.....

.....

[3]

(b) Study Fig. 8, which shows Bangladesh's actual and predicted population growth.

For
Examiner's
Use

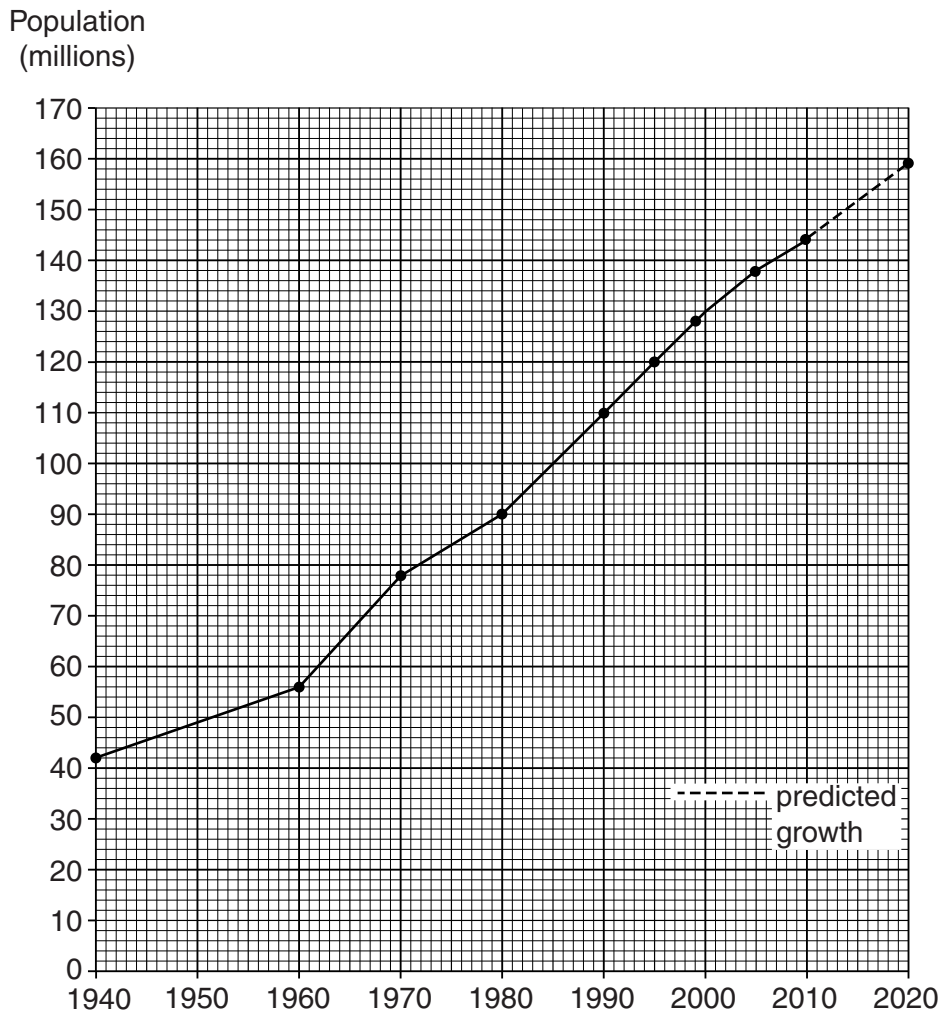


Fig. 8

(i) By how much is the population expected to grow between 2010 and 2020?

..... [1]

(ii) Describe the trends in population growth from 1940 to 2020 shown in Fig. 8.

.....

 [3]

(iii) A Suggest **three** reasons for the population changes shown in Fig. 8.

- 1
- 2
- 3 [3]

B For **one** of the reasons you described in (iii) A, explain how it contributes to population growth.

-
-
-
-
-
-
- [3]

(iv) A Briefly describe **three** problems caused by population growth.

- 1
- 2
- 3 [3]

B For **one** of the problems you described in (iv) A, explain fully how it is affected by population growth.

-
-
-
-
-
-
- [3]

- 5 (a) Study Fig. 9, which shows changes to the percentage of people employed in agriculture in Bangladesh.

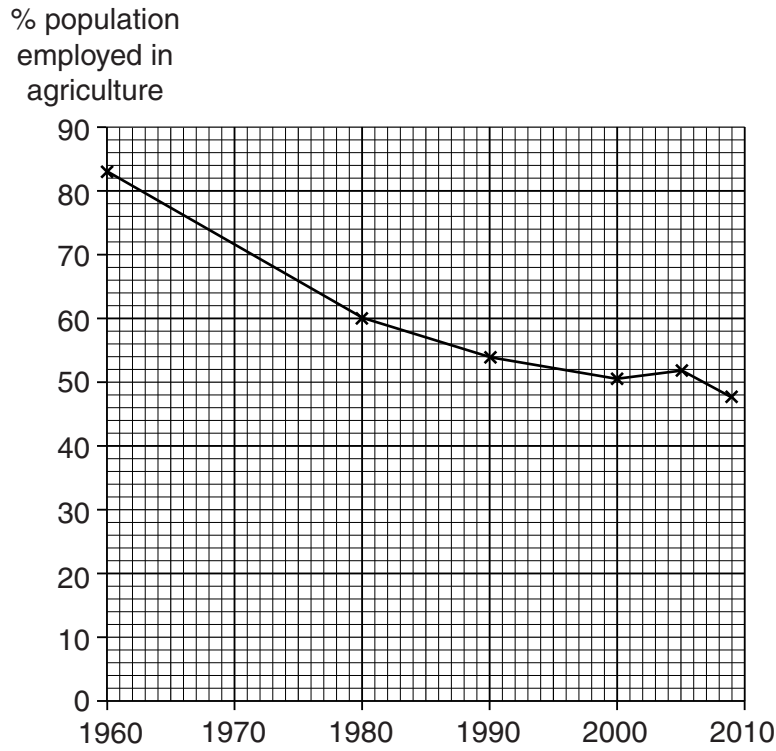


Fig. 9

- (i) Describe how employment in agriculture has changed between 1960 and 2009.

.....
.....
.....
..... [2]

- (ii) Give reasons for the changes you described in (a)(i).

.....
.....
.....
..... [2]

(c) (i) Name **four** important industries in Bangladesh.

- 1
- 2
- 3
- 4 [2]

(ii) For **one** of the industries you named, describe three of its characteristics.

Industry:

Characteristics:

.....

.....

.....

.....

.....

.....

..... [3]

(iii) Bangladesh is trying to encourage more industrial development. What are the likely benefits of such development?

.....

.....

.....

.....

.....

.....

.....

.....

..... [3]

(iv) What are the obstacles to Bangladesh developing its industries?

.....
.....
.....
.....
.....
.....
.....
.....
..... [3]

(d) Study the two statements below.

A 'Economic development in Bangladesh depends on the expansion of its industry.'

B 'The most important sector for Bangladesh's people is agriculture.'

(i) Give **one** piece of evidence which supports statement A.

.....
..... [1]

(ii) Give **one** piece of evidence which supports statement B.

.....
..... [1]

(iii) Which statement do you agree with the most? Give reasons for your answer.

.....
.....
.....
.....
.....
.....
.....
.....
..... [3]

[Total: 25]

Copyright Acknowledgements

Question 1 © Norman Buchignani & Doreen Indra; <http://www.livingwiththejamuna.com/essayintroduction.html>.

Permission to reproduce items where third-party owned material protected by copyright is included has been sought and cleared where possible. Every reasonable effort has been made by the publisher (UCLES) to trace copyright holders, but if any items requiring clearance have unwittingly been included, the publisher will be pleased to make amends at the earliest possible opportunity.

University of Cambridge International Examinations is part of the Cambridge Assessment Group. Cambridge Assessment is the brand name of University of Cambridge Local Examinations Syndicate (UCLES), which is itself a department of the University of Cambridge.